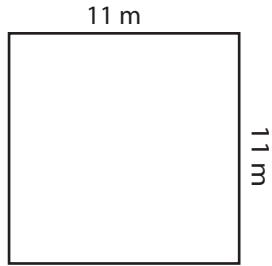


Area - Mixed Shapes

Level 3: S3

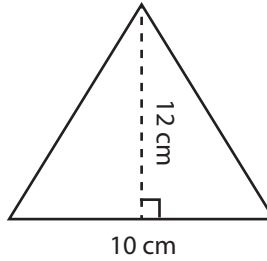
Find the area of each figure.

1)



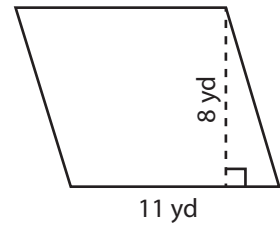
Area = _____

2)



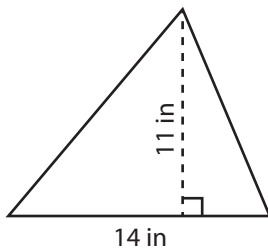
Area = _____

3)



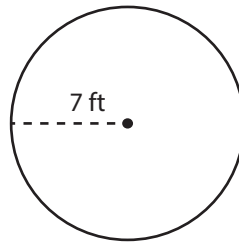
Area = _____

4)



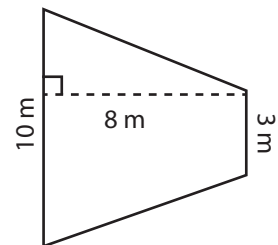
Area = _____

5)



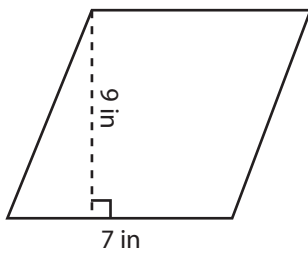
Area = _____

6)



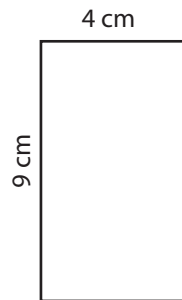
Area = _____

7)



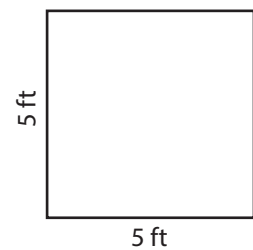
Area = _____

8)



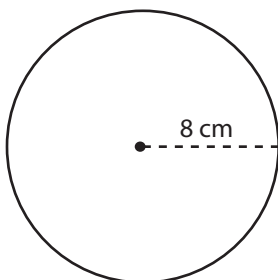
Area = _____

9)



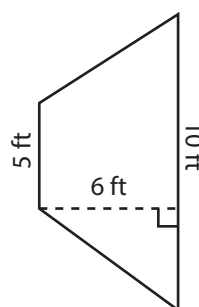
Area = _____

10)



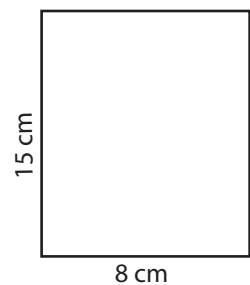
Area = _____

11)



Area = _____

12)



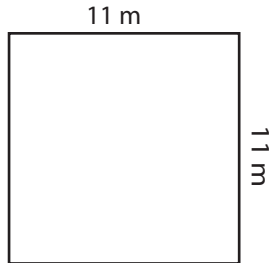
Area = _____

Answer Key**Area - Mixed Shapes**

Level 3: S3

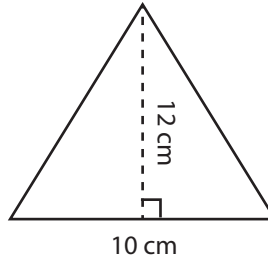
Find the area of each figure.

1)



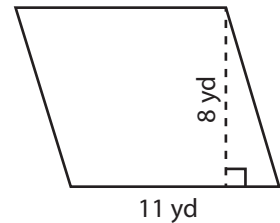
Area = 121 m^2

2)



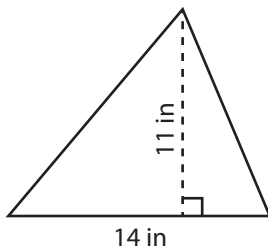
Area = 60 cm^2

3)



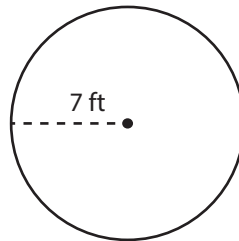
Area = 88 yd^2

4)



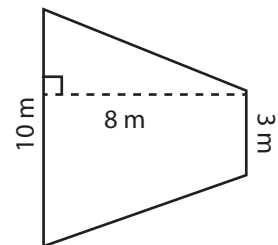
Area = 77 in^2

5)



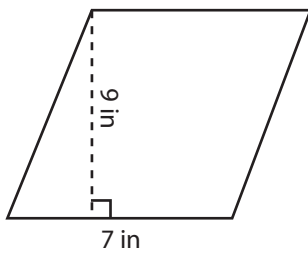
Area = $49\pi \text{ ft}^2$

6)



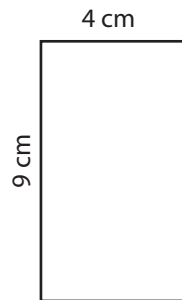
Area = 52 m^2

7)



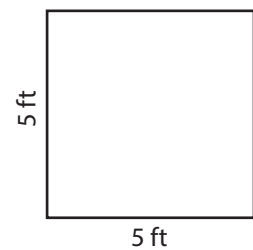
Area = 63 in^2

8)



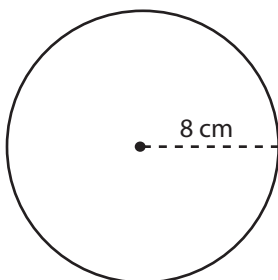
Area = 36 cm^2

9)



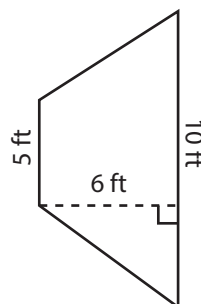
Area = 25 ft^2

10)



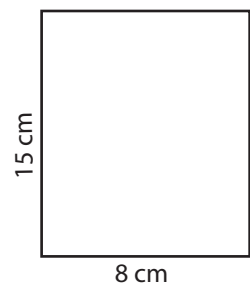
Area = $64\pi \text{ cm}^2$

11)



Area = 45 ft^2

12)



Area = 120 cm^2