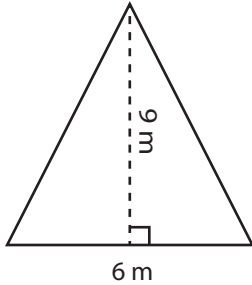


Area - Mixed Shapes

Level 3: S2

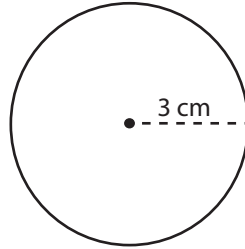
Find the area of each figure.

1)



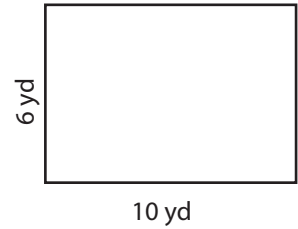
Area = _____

2)



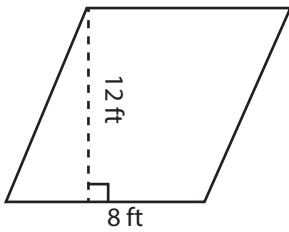
Area = _____

3)



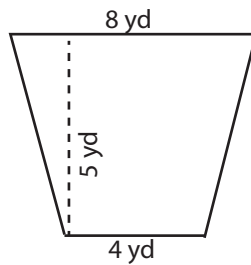
Area = _____

4)



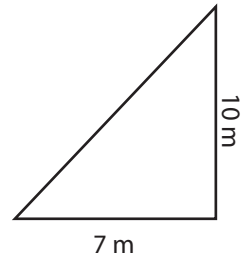
Area = _____

5)



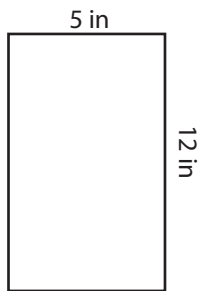
Area = _____

6)



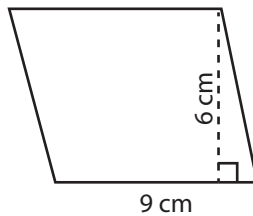
Area = _____

7)



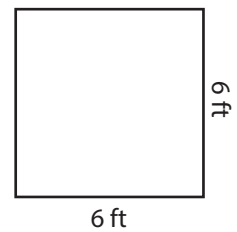
Area = _____

8)



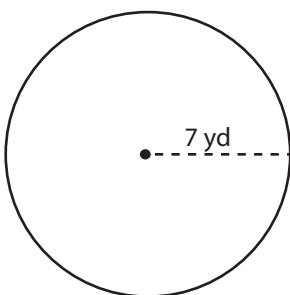
Area = _____

9)



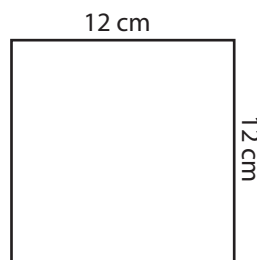
Area = _____

10)



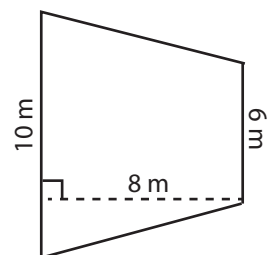
Area = _____

11)



Area = _____

12)



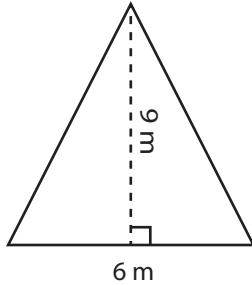
Area = _____

Answer Key**Area - Mixed Shapes**

Level 3: S2

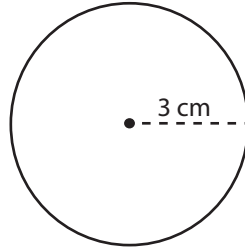
Find the area of each figure.

1)



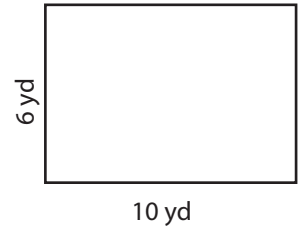
Area = **27 m²**

2)



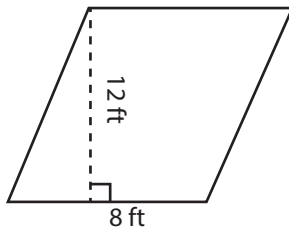
Area = **9π cm²**

3)



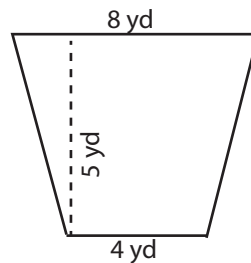
Area = **60 yd²**

4)



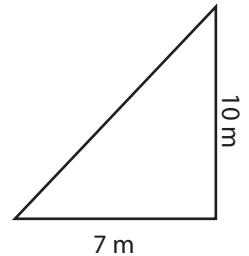
Area = **96 ft²**

5)



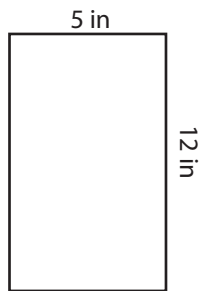
Area = **30 yd²**

6)



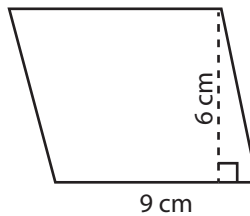
Area = **35 m²**

7)



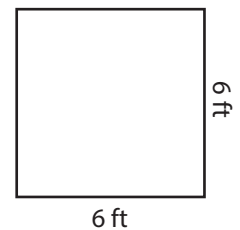
Area = **60 in²**

8)



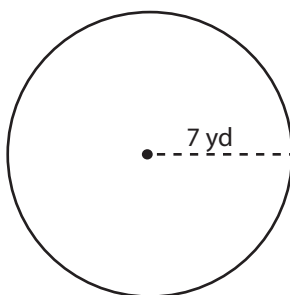
Area = **54 cm²**

9)



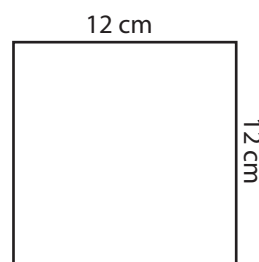
Area = **36 ft²**

10)



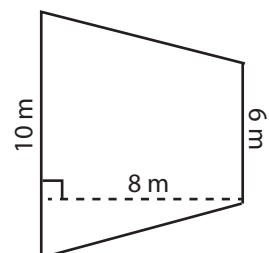
Area = **49π yd²**

11)



Area = **144 cm²**

12)



Area = **64 m²**