

Name: \_\_\_\_\_

Period: \_\_\_\_\_

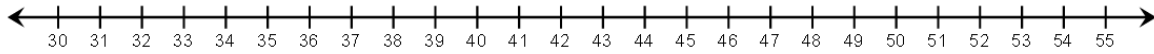
## Making a Box-and-Whisker

**Int 1**

**Unit 10**

Use the following numbers to answer questions #1 – 6.

**51, 41, 46, 30, 34, 38, 54, 39, 50, 43, 33, 31, 47**



1. Minimum \_\_\_\_\_      2. Maximum \_\_\_\_\_      3. Median \_\_\_\_\_

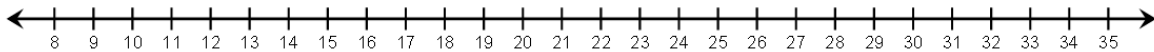
4. 1<sup>st</sup> Quartile (lower) \_\_\_\_\_      5. 3<sup>rd</sup> Quartile (upper) \_\_\_\_\_

6. Interquartile Range \_\_\_\_\_

---

Use the following numbers to answer questions #7 – 12.

**14, 18, 12, 10, 19, 28, 24, 17, 27, 30, 32, 25**



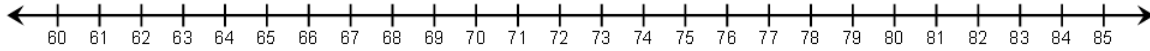
7. Minimum \_\_\_\_\_      8. Maximum \_\_\_\_\_      9. Median \_\_\_\_\_

10. 1<sup>st</sup> Quartile (lower) \_\_\_\_\_      11. 3<sup>rd</sup> Quartile (upper) \_\_\_\_\_

12. Interquartile Range \_\_\_\_\_

Use the following numbers to answer questions #13 – 18.

75, 65, 63, 71, 78, 83, 62, 74, 76, 70, 77



13. Minimum \_\_\_\_\_

14. Maximum \_\_\_\_\_

15. Median \_\_\_\_\_

16. 1<sup>st</sup> Quartile (lower) \_\_\_\_\_

17. 3<sup>rd</sup> Quartile (upper) \_\_\_\_\_

18. Interquartile Range \_\_\_\_\_