

HW 5-2**Equations from
Angles and Triangles****Unit 5****Int 1**

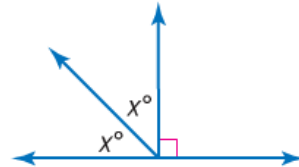
For the following problems, do each of the following steps.

- Identify the type of angle relationship that is shown.
- Set up an equation.
- Solve the equation for x .

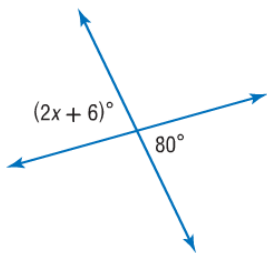
1)



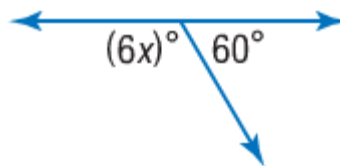
6)



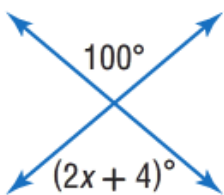
2)



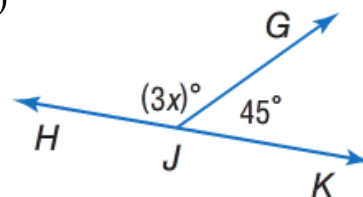
7)



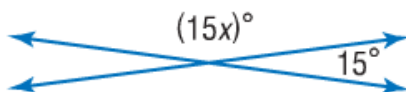
3)



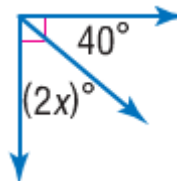
8)



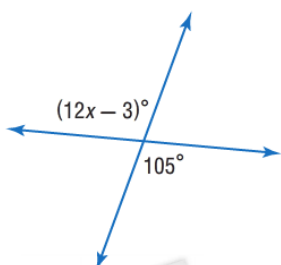
4)



9)



5)



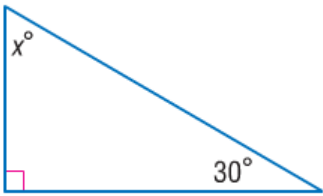
10) $\angle A$ and $\angle B$ are complementary angles. The measure of $\angle B$ is $(4x)^\circ$ and the measure of $\angle A$ is 50° . What is the value of x ?

Find the value of x .

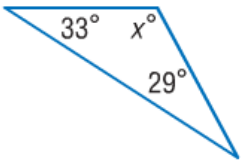
11)




12)



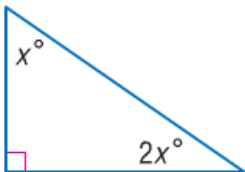
13)



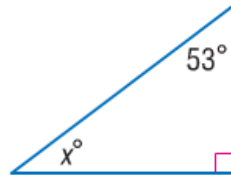
14)



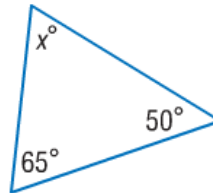
15)



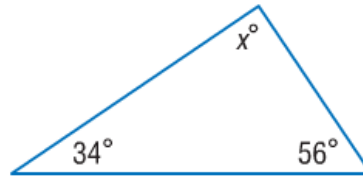
16)



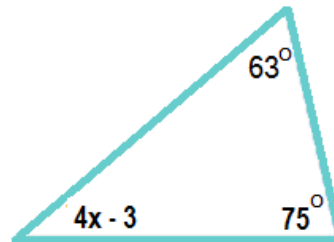
17)



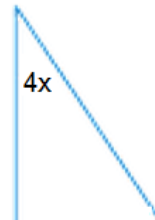
18)



19)

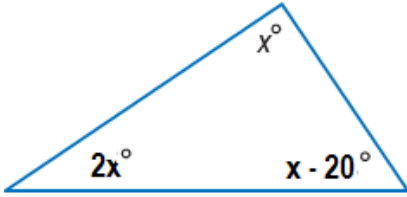


20)



Find the value of x .

21)



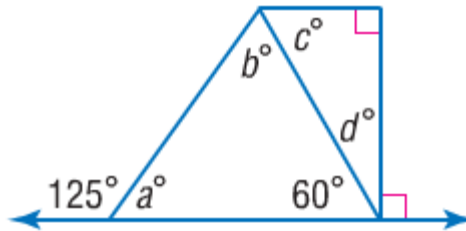
Given the figure below, solve for the missing angle measurements.

22) $m\angle a$

23) $m\angle b$

24) $m\angle c$

25) $m\angle d$

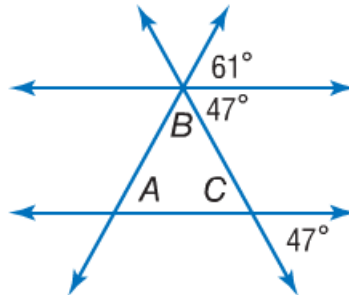


Given the figure below, solve for the missing angle measurements.

26) $m\angle B$

27) $m\angle C$

28) $m\angle A$



29) Find the value of $\angle NLR$.

